


Vorname.....

Datum

MINUS




Schreibe die passende Rechnung:




- =




- =




- =



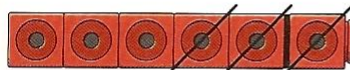
- =




- =



- =



- =



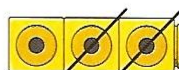
- =



- =



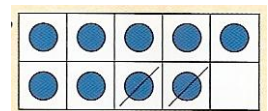
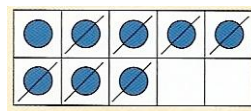
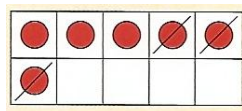
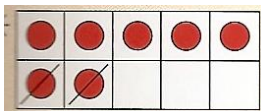
- =



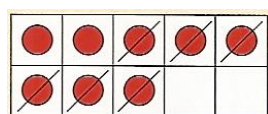
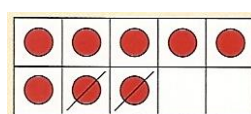
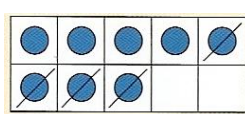
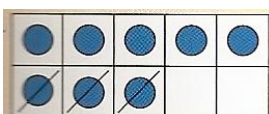
- =



- =




Blank lines for writing answers to the ten-frame problems.

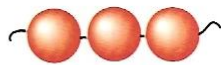


Blank lines for writing answers to the ten-frame problems.

Streiche durch und rechne:



$$\boxed{6} - \boxed{2} = \boxed{}$$



$$\boxed{3} - \boxed{1} = \boxed{}$$

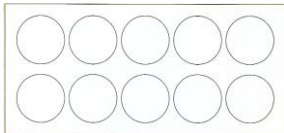


$$\boxed{5} - \boxed{4} = \boxed{}$$

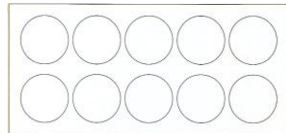


$$\boxed{4} - \boxed{2} = \boxed{}$$

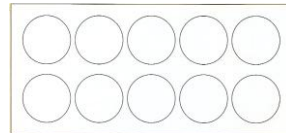
Zeichne und rechne:



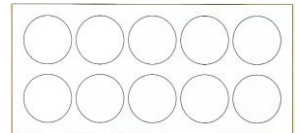
$$7 - 1 =$$




$$7 - 2 =$$




$$8 - 1 =$$




$$6 - 4 =$$




$$8 - 3 =$$




$$9 - 4 =$$




$$10 - 5 =$$



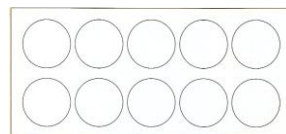
$$5 - 2 =$$



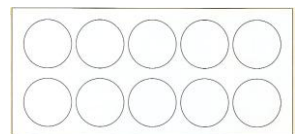
$$5 - 3 =$$



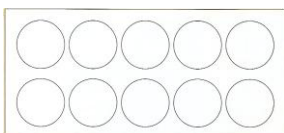
$$7 - 4 =$$




$$8 - 5 =$$



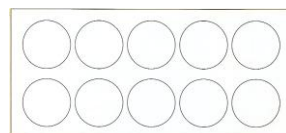
$$8 - 6 =$$



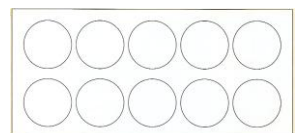
$$9 - 7 =$$



$$4 - 1 =$$

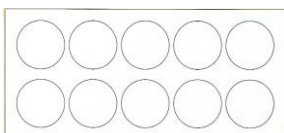


$$9 - 6 =$$




$$7 - 5 =$$

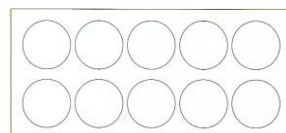
Zeichne und ergänze:



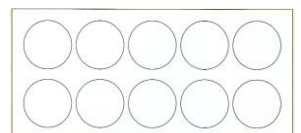
$$8 - \dots = 7$$



$$9 - \dots = 6$$



$$7 - \dots = 5$$



$$10 - \dots = 2$$